

Chapter 3

Review

1. $|x|$ read "the absolute value of x ", is a measure of _____ and as such is always _____.

$|x|$ read "the absolute value of x ", is a measure of **distance** and as such is always **positive**.

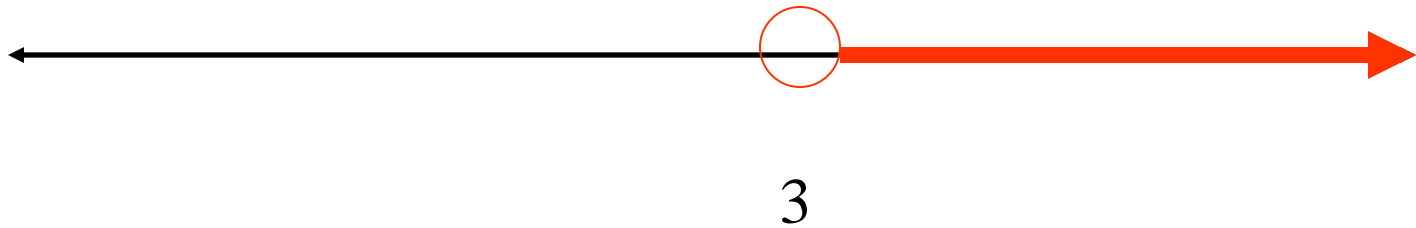
2. The only difference between solving inequalities rather than equations, is . . .

The only difference between solving inequalities rather than equations, is . . .

when you multiply or divide both sides of an inequality by a negative number you must reverse the inequality sign.

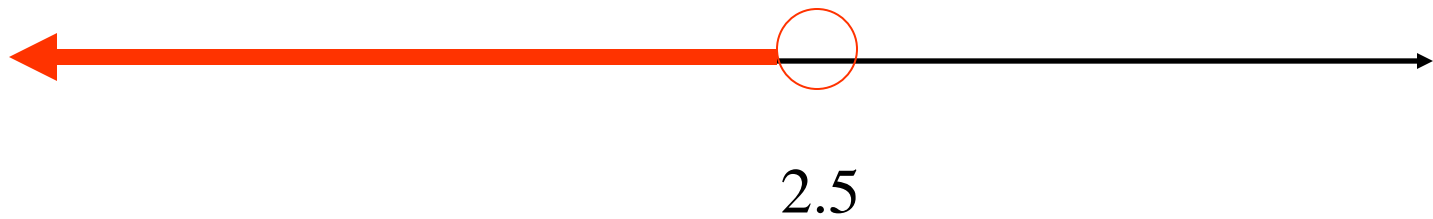
3. What does the graph of $x > 3$ look like ?

What does the graph of $x > 3$ look like ?



4. What does the graph of $2.5 > x$ look like ?

4. What does the graph of $2.5 > x$ look like ?



5. Write an inequality to define the following: At least 600 people(p) attended a school play.

5. Write an inequality to define the following: At least 600 people(p) attended a school play.

$$p \geq 600$$

6. Write an inequality to define the following: An elevator can carry at most 15 people (p).

6. Write an inequality to define the following:
An elevator can carry at most 15 people (p).

$$p \leq 15$$

7. Solve the following inequality: $h + 3 > 2$

7. Solve the following inequality:

$$h + 3 > 2$$

$$\begin{array}{r} -3 \\ -3 \end{array}$$

$$\mathbf{h > -1}$$

8. Solve the following inequality: $t - 4 < -9$

8. Solve the following inequality:

$$t - 4 < -9$$

$$+4 \quad +4$$

$$t < -5$$

9. Solve the following inequality: $8m \geq -24$

9. Solve the following inequality:

$$8m \geq -24$$

$$\frac{\quad}{8} \geq \frac{\quad}{8}$$

$$m > -3$$

10. Solve the following inequality: $-6w \leq 12$

10. Solve the following inequality:

$$-6w \leq 12$$

$$\begin{array}{r} \text{-----} \quad \text{-----} \\ -6 \quad \quad -6 \end{array}$$

$$w \geq -2$$

11. Solve the following inequality: $-\frac{3}{5}n \geq -9$

11. Solve the following inequality:

$$-\frac{3}{5}n \geq -9$$

$$* -\frac{5}{3} \quad * -\frac{5}{3}$$

$$\underline{n} \leq 15$$

12. Solve the following inequality: $0 < 4c$

12. Solve the following inequality:

$$0 < 4c$$

$$\frac{\quad}{4} < \frac{\quad}{4}$$

$$0 < c \text{ or } c > 0$$

13. You have an allowance of \$12.00. You buy a discount movie ticket that costs at least \$3.50 and popcorn that costs \$2.75. Write an inequality to find how much you have for other spending (s).

13. You have an allowance of \$12.00. You buy a discount movie ticket that costs at least \$3.50 and popcorn that costs \$2.75. Write an inequality to find how much you have for other spending (s).

$$12 - (3.5 + 2.75) \geq s$$

14. Suppose you earn \$7.25 per hour working part-time as a florist. Write an inequality to find how many hours (h) you must work to earn at least \$200.

14. Suppose you earn \$7.25 per hour working part-time as a florist. Write an inequality to find how many hours (h) you must work to earn at least \$200.

$$7.25h \geq 200$$

15. Solve the inequality: $3n + 5 > -1$

15. Solve the inequality:

$$3n + 5 > -1$$

$$- 5 \quad - 5$$

$$3n > -6$$

$$3 \quad 3$$

$$**n > -2**$$

16. Solve the following inequality:

$$6(c - 1) \leq -18$$

16. Solve the following inequality:

$$6(c - 1) \leq -18$$

$$6c - 6 \leq -18$$

$$+ 6 \quad + 6$$

$$6c \leq -12$$

$$6 \quad 6$$

$$\underline{c} \leq -2$$

17. Solve the following inequality:

$$3m > 5m + 12$$

17. Solve the following inequality:

$$3m > 5m + 12$$

$$- 5m \quad -5m$$

$$-2m > 12$$

$$-2 \quad -2$$

$$**m < -6**$$

18. Solve the following inequality:

$$4 + x/2 > 2x$$

18. Solve the following inequality:

$$4 + x/2 > 2x$$

$$- x/2 \quad - x/2$$

$$4 > 1.5x$$

$$1.5 \quad 1.5$$

$$2 \frac{2}{3} > x$$

19. Solve the following inequality:

$$-\frac{6}{7}y - 6 \geq 42$$

19. Solve the following inequality:

$$-\frac{6}{7}y - 6 \geq 42$$

$$+ 6 \quad + 6$$

$$-\frac{6}{7}y \geq 48$$

$$* -\frac{7}{6} \quad * -\frac{7}{6}$$

$$y \leq -56$$

20. Trenton sells electronic supplies. Each week he earns \$190 plus a commission of 4% of his sales. This week his goal is to earn at least \$500. Write an inequality to find the amount of sales (s) he must have to reach his goal.

20. Trenton sells electronic supplies. Each week he earns \$190 plus a commission of 4% of his sales. This week his goal is to earn at least \$500. Write an inequality to find the amount of sales (s) he must have to reach his goal.

$$190 + .04s \geq 500$$

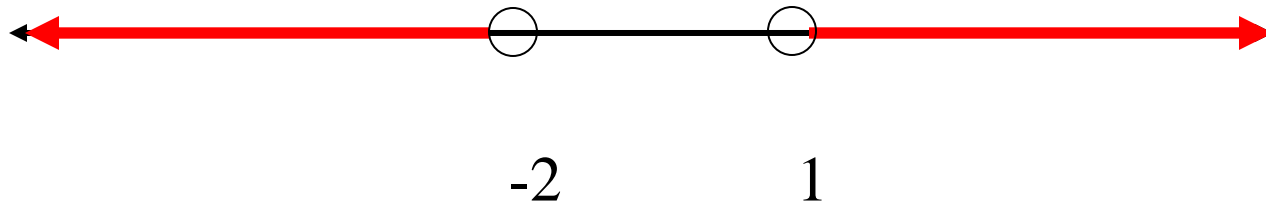
21. Graph the solution to the following compound inequality: $x > -3$ and $x < 2$

21. Graph the solution to the following compound inequality: $x > -3$ and $x < 2$



22. Graph to the solution to the following compound inequality: $m < -2$ or $m > 1$

22. Graph to the solution to the following compound inequality:
 $m < -2$ or $m > 1$



23. Graph the solution to the following compound inequality:

$$-3 \leq k \leq 4$$

23. Graph the solution to the following compound inequality:

$$-3 \leq k \leq 4$$



24. Solve and graph the solution to the following compound inequality:

$$-3 < z - 1 < 3$$

24. Solve and graph the solution to the following compound inequality:

$$-3 < z - 1 < 3$$

$$+ 1 \quad + 1 \quad + 1$$

$$-2 < z < 4$$



25. Solve and graph the following compound inequality:

$$2t < -4 \quad \text{or} \quad 7t < 49$$

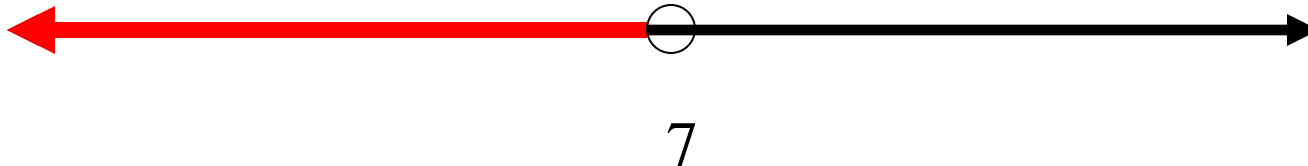
25. Solve and graph the following compound inequality:

$$2t < -4 \quad \text{or} \quad 7t < 49$$

$$2 \quad 2$$

$$7 \quad 7$$

$$t < -2 \quad \text{or} \quad t < 7$$



26. Solve and graph the solution to the following equation:

$$|y| = 5$$

26. Solve and graph the solution to the following equation: $|y| = 5$

$$y = 5 \quad \text{or} \quad y = -5$$



27. Solve and graph the solution to the following equation:


$$|p + 3| = 9.5$$

27. Solve and graph the solution to the following equation: $|p + 3| = 9.5$

$$p + 3 = 9.5 \quad \text{or} \quad p + 3 = -9.5$$
$$\begin{array}{r} -3 \\ -3 \end{array} \quad \begin{array}{r} -3 \\ -3 \end{array}$$

$$p = 6.5$$

$$p = -12.5$$



28. Solve the following equation or inequality:

$$|3x + 5| > 2$$

28. Solve the following equation or inequality:

$$|3x + 5| > 2$$


$$3x + 5 > 2 \quad \text{or} \quad 3x + 5 < -2$$

$$\begin{array}{ccc} -5 & -5 & \\ \hline \end{array}$$

$$3x > -3 \quad \text{or} \quad 3x < -7$$

$$\begin{array}{ccc} \text{---} & \text{---} & \\ \hline & & \hline \end{array}$$

$$x > -1 \quad \text{or} \quad x < -7/3$$



29. Solve and graph the solution to the following inequality:

$$-11 - |3z| < -2$$

29. Solve and graph the solution to the following inequality:

$$\begin{array}{r} -11 - |3z| < -2 \\ + 11 \qquad + 11 \\ \hline - |3z| < 9 \\ \hline -1 \qquad -1 \\ |3z| < -9 \end{array}$$

No solution

30. Solve and graph the solution to the following inequality:

$$4 | k + 5 | > 8$$

30. Solve and graph the solution to the following inequality:

$$4 |k + 5| > 8$$

$$\frac{\text{-----}}{4} \quad \frac{\text{----}}{4}$$

$$|k + 5| > 2$$

$$k + 5 > 2 \quad \text{or} \quad k + 5 < -2$$
$$\quad -5 \quad -5 \qquad \quad -5 \quad -5$$

$$k > -3 \quad \text{or} \quad k < -7$$

